




### ESEMPI DI TEST PER LA VALUTAZIONE DELLE COMPETENZE MATEMATICHE PRIMO CICLO Scuola Secondaria di primo grado - Scuola Media


**Allegato 6C** 3° anno – Misurare (a cura di L. Cerutti)

Nome e Cognome	Classe	Anno Scolastico	Data della prova


#### - Obiettivo: misurare



----- cm




--- mm



----- dm

$$\text{cyan rectangle} + \text{cyan rectangle} = \text{yellow square}$$

$$\text{yellow square} + \text{yellow square} = \text{green rectangle}$$



----- cm = \_\_\_\_\_ m